



Welcome to the quiz!

Let's study the words

Залив —

Мыс —

Пролив —

Омывать —

Граница —

Граничить —

Население —

Пустыня —

Нефть —

Медь —

Руда —

Bay/Gulf

Desert

Ore

Copper

Cape

Boarder


to boarder

Strait/Channel

Population

Wash

Oil



Complete

Ore

Oil

Desert

Boarder

Population

to boarder

Bay

Cape

Copper

Strait

Wash

The Gulf of Guinea is a
coast of Africa.

on the west

Complete

Ore

Oil

Desert

Boarder

Population

to boarder

Cape

Copper

Strait

Wash

The signs  stand for

Complete

Desert

Boarder

Population

to boarder

Cape

Strait

Wash

The _____ of Good Hope is located on the south of Africa.

A wide-angle photograph of the Sahara Desert under a dramatic, cloudy sky. The foreground shows sparse, dry vegetation and a small body of water. The middle ground is a vast, flat expanse of desert with scattered trees and shrubs. In the background, a range of low, rolling mountains is visible. Several dark, semi-transparent text boxes are overlaid on the image.

Complete

Desert

Boarder

Population

to boarder

Strait

Wash

Sahara is the largest

in the world.

Complete

Boarder

Population

to boarder

Strait

Wash

The Indian Ocean and the Atlantic Ocean
Africa from the West and from the East

Complete

Boarder

Population

to boarder

Strait

According to the information of 2023 year
the of Africa was 1,46 billion people

Complete

Boarder

to boarder

Strait

The Mozambique
continent and Madagascar.

separates African

Complete

Boarder


to boarder

The between Europe and Africa runs
through the Strait of Gibraltar




The background of the slide is a photograph of a savanna landscape. In the foreground, there is tall, dry, yellowish-brown grass. In the middle ground, there are several acacia trees with their characteristic flat-topped canopies. One large acacia tree is prominent on the left side. In the background, a giraffe is visible, partially obscured by the grass and trees. The sky is a pale, hazy blue.

**Say the
numbers**



Africa and numbers


Africa square	The smallest African country square	Lake Victoria square
Part of the land area	The highest point of Africa	The Nile length
The Seychelles Islands square	The largest African country square	Population



Articles.

Do you remember?

- 1) ____ Madagascar
- 2) the Nile
- 3) ____ Sahara
- 4) the Aden Strait
- 5) ____ Victoria Lake
- 6) the Seychelles
- 7) ____ Algeria
- 8) the Cape of Good Hope
- 9) the Strait of Gibraltar
- 10) the Atlantic Ocean





Name the objects

1. The Atlantic Ocean
2. Madagascar
3. The Indian Ocean
4. The Mozambique Strait/Channel
5. The Nile
6. The Gulf of Guinea
7. The Cape of Good Hope
8. Victoria Lake
9. The Strait of Gibraltar
10. Sahara

